



**-ANSWER SHEET-**  
**NATIONAL SOCIAL STUDIES LEAGUE - 2022**

**Grade 2 Contest**

TIME: 35 Minutes

DATE: April 25 through May 6, 2022

Name \_\_\_\_\_

1. \_\_\_\_\_

2. \_\_\_\_\_

3. \_\_\_\_\_

4. \_\_\_\_\_

5. \_\_\_\_\_

6. \_\_\_\_\_

7. \_\_\_\_\_

8. \_\_\_\_\_

9. \_\_\_\_\_

10. \_\_\_\_\_

11. \_\_\_\_\_

12. \_\_\_\_\_

13. \_\_\_\_\_

14. \_\_\_\_\_

15. \_\_\_\_\_

16. \_\_\_\_\_

17. \_\_\_\_\_

18. \_\_\_\_\_

19. \_\_\_\_\_

20. \_\_\_\_\_

21. \_\_\_\_\_

22. \_\_\_\_\_

23. \_\_\_\_\_

24. \_\_\_\_\_


25. \_\_\_\_\_

# National Social Studies League

## Grade 2

**DIRECTIONS:** On the answer sheet, write the letter of the choice that best answers or completes the question.

1. I wanted our country to be free. The people chose me to lead their fight against England. I became the first president of our new country. Who am I?



A.

B.

C.

D.

2. Rules that everyone must obey are called \_\_\_\_\_.
- A. ideas  
B. rights  
C. laws  
D. suggestions
3. Money that people pay to the government to help pay for the services they receive is called \_\_\_\_\_.
- A. taxes  
B. income  
C. salary  
D. expenses
4. We celebrate Thanksgiving on the fourth Thursday of November. On this calendar, Thanksgiving Day will be on \_\_\_\_\_.
- A. November 15  
B. November 22  
C. November 29  
D. November 30

November						
S	M	T	W	T	F	S
				1	2	3
4	5	6	7	8	9	10
11	12	13	14	15	16	17
18	19	20	21	22	23	24
25	26	27	28	29	30	

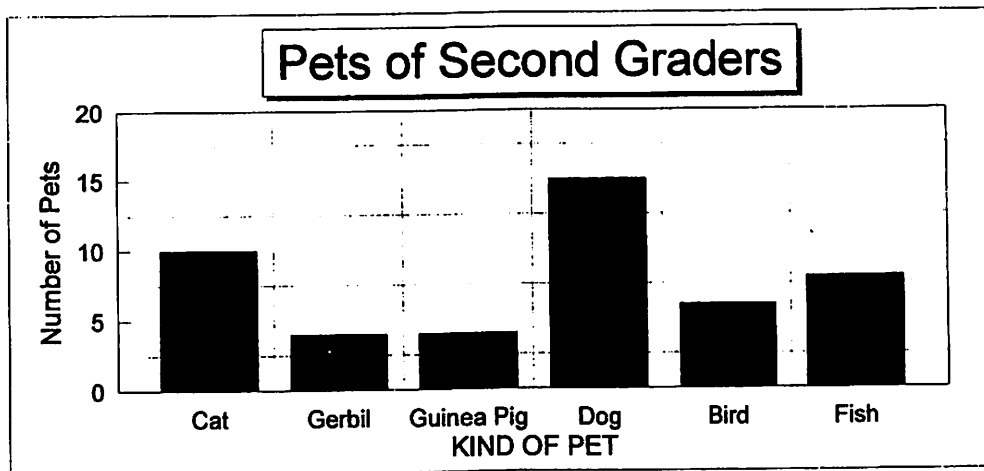


11. People work together here to produce a large number of goods. This building is called a \_\_\_\_\_.
- A. skyscraper
  - B. factory
  - C. museum
  - D. monument



12. Things in nature that people use are called \_\_\_\_\_.
- A. products
  - B. goods
  - C. services
  - D. resources
13. The head of the government of a city is the \_\_\_\_\_.
- A. governor
  - B. president
  - C. councilman
  - D. mayor

USE THIS BAR GRAPH TO ANSWER QUESTIONS 14 AND 15:



14. This bar graph shows us \_\_\_\_\_.
- A. how many children are in second grade
  - B. which pets are easy to care for
  - C. the kinds of pets second graders have
  - D. which kind of pet is the largest
15. According to the graph, the pet most second graders have is a \_\_\_\_\_.
- A. cat
  - B. dog
  - C. gerbil
  - D. bird

# National Social Studies League

## Grade 2

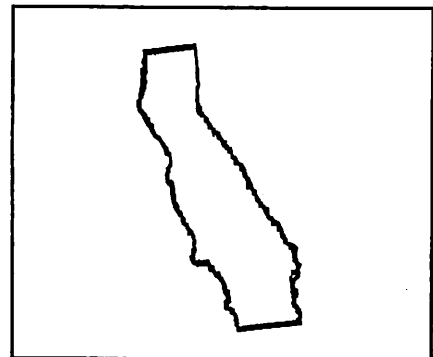
Page 4

USE THE FOLLOWING TIME LINE TO ANSWER QUESTIONS 16 AND 17:


### Time Line of a Day at Camp

Breakfast	Music	Swimming	Lunch	Arts & Crafts	Hiking	Dinner
8 A.M.	9:30 A.M.	11 A.M.	12:30 P.M.	2 P.M.	3:30 P.M.	5 P.M.

16. This time line can be used to find out \_\_\_\_\_.
- A. how much fun it is to go to camp
  - B. how many children go to camp
  - C. when things happen during the day at camp
  - D. why children go to camp
17. From this time line we can see that \_\_\_\_\_.
- A. music and swimming are before lunch
  - B. hiking is after dinner
  - C. arts and crafts are in the morning
  - D. lunch is at 2 P.M.
18. We get our heritage from our \_\_\_\_\_.
- A. neighborhood
  - B. family
  - C. community
  - D. school
19. Which part of a map will help you to find the direction you would travel from one place to another?
- A. distance scale
  - B. key
  - C. symbol
  - D. compass rose
20. In this state you can visit Disneyland, go to Death Valley, and see the tallest trees in the world. It is the third largest state in area. Its nickname is the Golden State. What state is this?
- A. Texas
  - B. Alaska
  - C. California
  - D. Florida



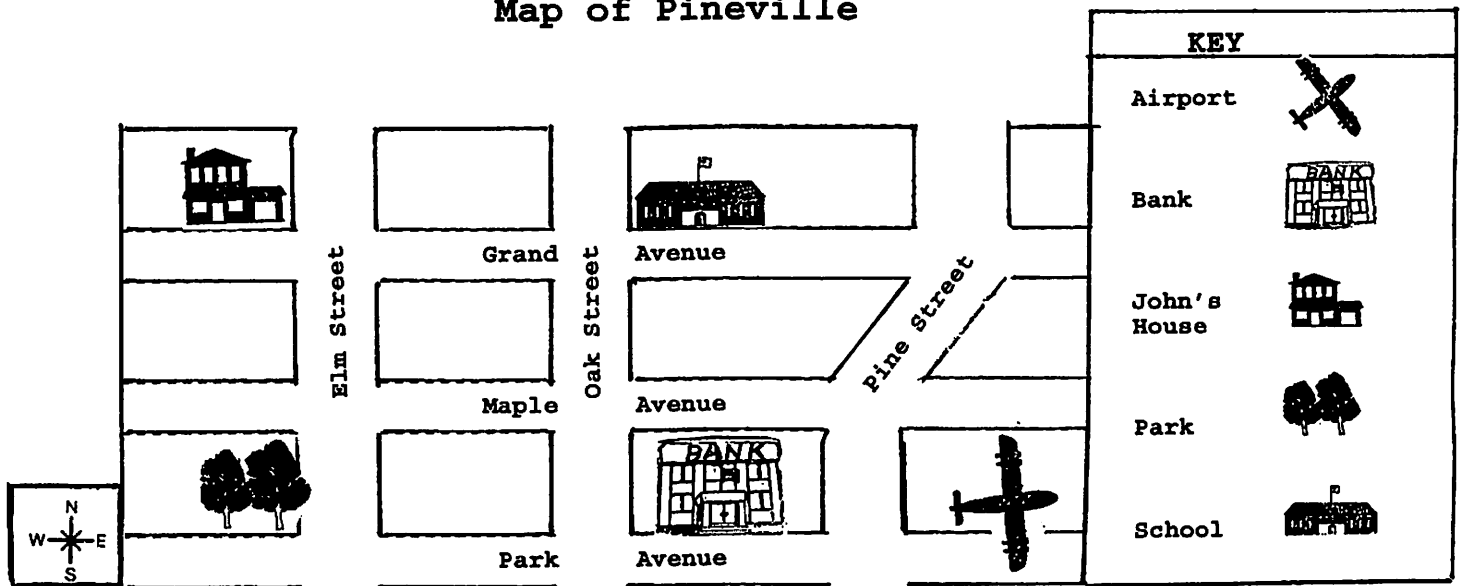
22. In which community would you find people living and working in these buildings?
- A. a city
  - B. a suburb
  - C. a village
  - D. a town



23. Amy and Michael want to learn about the Pilgrims. Which of these would give them the most information?
- A. a dictionary
  - B. an internet search
  - C. an atlas
  - D. a magazine

USE THIS MAP TO ANSWER QUESTIONS 24 AND 25:

Map of Pineville



24. John has to go from school to his house. Then he has to go from his house to the park. He will travel \_\_\_\_\_.
- A. west and then south
  - B. south and then east
  - C. east and then north
  - D. north and then west
25. The airport is located \_\_\_\_\_.
- A. on the same street as the school
  - B. at the corner of Elm Street and Park Avenue
  - C. in the southeast corner of Pineville
  - D. just east of John's house